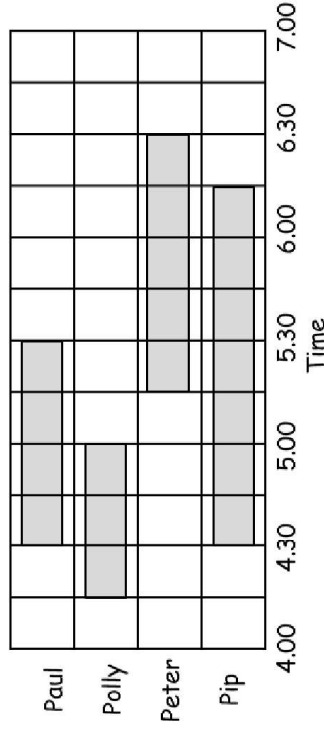


Bar Chart Worksheet 3

1. The table below shows the favourite holiday destinations of Class 3. Use the table to draw a bar chart. Think about the best scale to use.

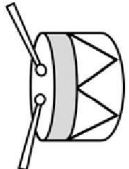

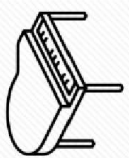

Country	Tally
Italy	IIII
France	IIII I
Spain	IIII IIII II
Turkey	II
U.S.A.	IIII I

2. This bar chart shows when the children did their homework one evening. How long did each child spend doing their homework?



Paul _____
 Polly _____
 Peter _____
 Pip _____

3. This table shows how much money Hamchester Philharmonic Orchestra spent on instruments last year. Which would be more suitable to represent this information, a bar chart or a pictogram? Explain why.

Instrument				
Cost (£)	630	1150	3690	2400
