





Pictogram Worksheet

Using the data from the pictogram answer the questions below.

 = 4 bats

Number of witches	Bats owned
1	
2	
3	
4	

1. How many witches own 16 bats?

2. How many witches own the most bats?

3. What other questions could you ask about the pictogram?

4. Boris says that 2 witches own 3 bats. Is he correct? _____

5. If Boris is wrong, then what mistake has he made? _____